

Table des figures

1	$k(x) = f(-x)$	1
2	$h(x) = f(x) $	1
3	$g(x) = f(x) + 2$	1
4	$n(x) = f(x + 1)$	1
5	$m(x) = f(x - 1) + 3$	1
6	$l(x) = -f(x)$	1

TD : Fonctions associées

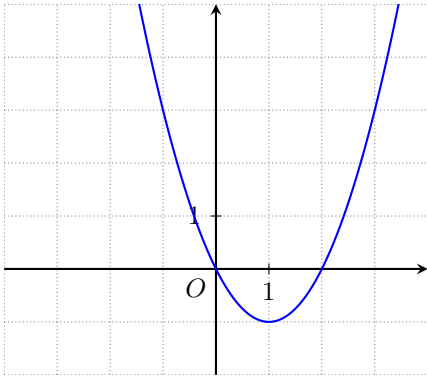


FIGURE 1: $k(x) = f(-x)$

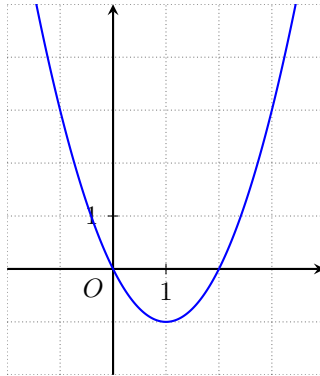


FIGURE 2: $h(x) = |f(x)|$

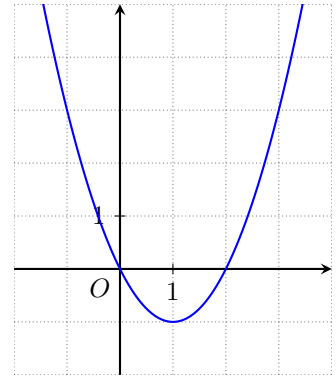


FIGURE 3: $g(x) = f(x) + 2$

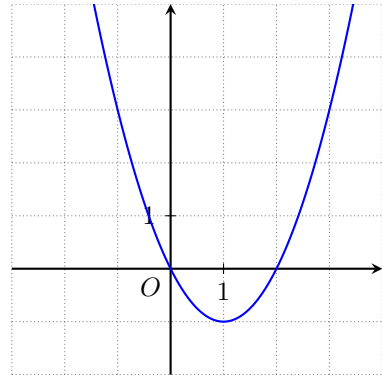


FIGURE 4: $n(x) = f(x + 1)$

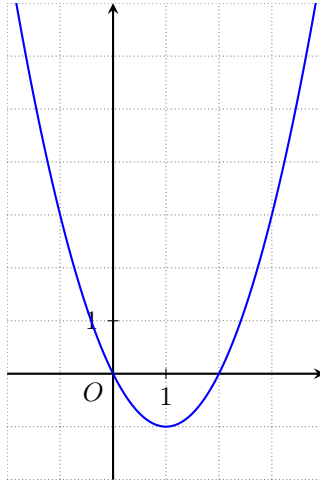


FIGURE 5: $m(x) = f(x - 1) + 3$

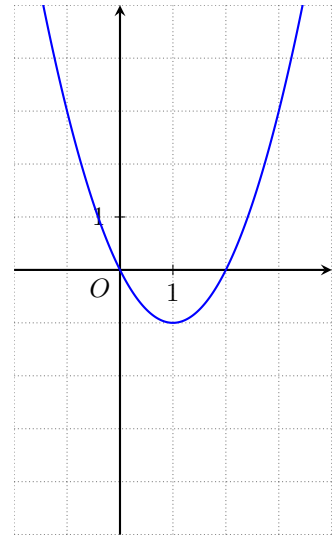


FIGURE 6: $l(x) = -f(x)$